

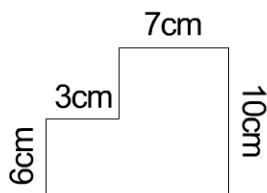


Measures

The shapes are not drawn to scale.

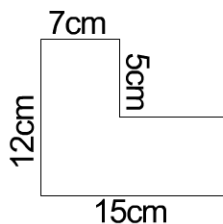
Calculate the areas of these compound shapes by first splitting them into rectangles.

Q1



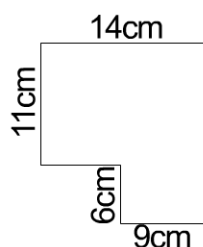
area = **88** cm²

Q2



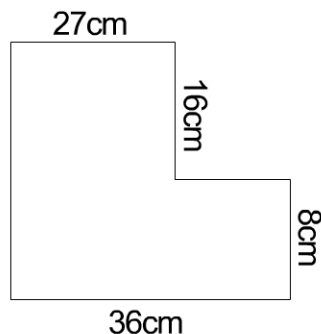
area = **140** cm²

Q3



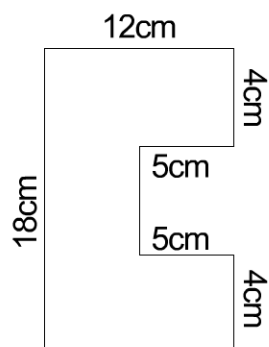
area = **208** cm²

Q4



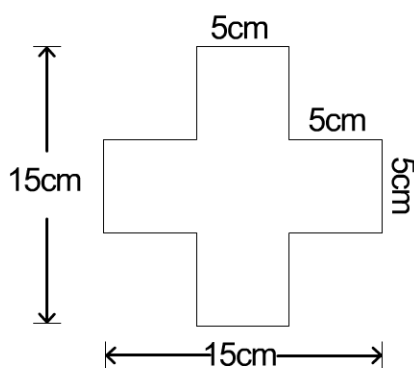
area = **720** cm²

Q5



area = **166** cm²

Q6



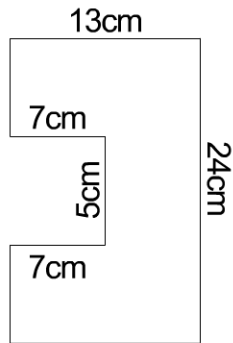
area = **125** cm²



Measures

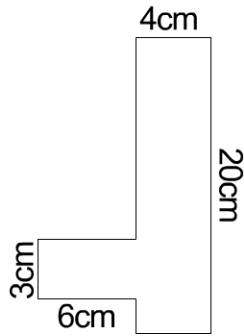
Calculate the areas of these compound shapes by first splitting them into rectangles.

Q7



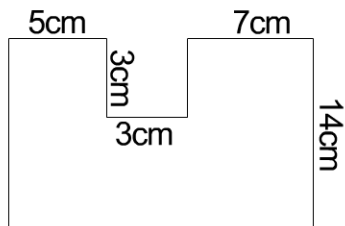
area = **277** cm²

Q8



area = **98** cm²

Q9



area = **201** cm²